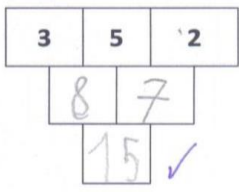
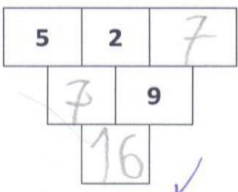
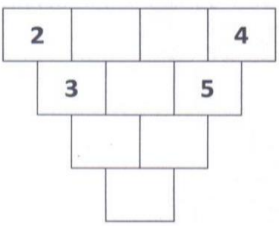
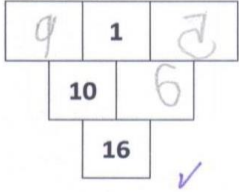
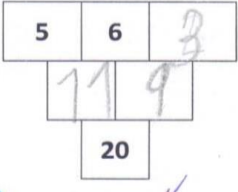
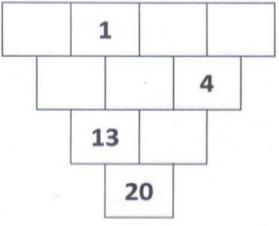
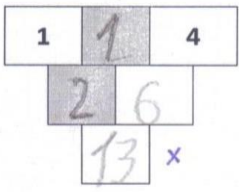
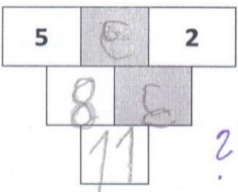
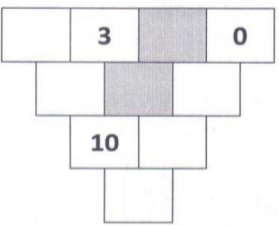


Příloha č. 5: Test z matematiky v 1. ročníku, jehož cílem bylo ověřit výstup ŠVP

Žák vytváří hypotézy a ověřuje je; žák provádí z paměti jednoduché početní operace s přirozenými čísly.

Test obsahuje úkoly různé obtížnosti. Úroveň obtížnosti je označena počtem hvězdiček. Z testu je zřejmé, jak obtížné úkoly žák zvládá.

 <p>*</p>	 <p>**</p> <p style="text-align: right;">3</p>	 <p>***</p>
 <p>*</p>	 <p>**</p> <p style="text-align: right;">3</p>	 <p>***</p>
 <p>*</p> <p style="text-align: right;">1</p> <p> <input type="checkbox"/> + <input type="checkbox"/> = 3 </p>	 <p>**</p> <p style="text-align: right;">TADY TI TO NEVYCHÁZÍ!</p> <p> <input type="checkbox"/> + <input type="checkbox"/> = 6 </p>	 <p>***</p> <p> <input type="checkbox"/> + <input type="checkbox"/> = 11 </p>

ÚKOL JSI ŘEŠILA UPŘÁVNĚ, CHYBU MÁVU VE VÝPOČTU.

<div style="text-align: center;"> <table border="1" style="margin: 0 auto;"> <tr><td>3</td><td>5</td><td>2</td></tr> <tr><td></td><td></td><td></td></tr> <tr><td></td><td></td><td></td></tr> </table> </div> <p style="text-align: center;">*</p>	3	5	2							<div style="text-align: center;"> <table border="1" style="margin: 0 auto;"> <tr><td>5</td><td>2</td><td>7</td></tr> <tr><td>7</td><td>9</td><td></td></tr> <tr><td></td><td>10</td><td></td></tr> </table> </div> <p style="text-align: center;">**</p>	5	2	7	7	9			10		<div style="text-align: center;"> <table border="1" style="margin: 0 auto;"> <tr><td>2</td><td>1</td><td>1</td><td>4</td></tr> <tr><td>3</td><td>2</td><td>5</td><td></td></tr> <tr><td></td><td>5</td><td>7</td><td></td></tr> <tr><td></td><td></td><td>12</td><td></td></tr> </table> </div> <p style="text-align: center;">***</p> <p style="text-align: right;">4</p>	2	1	1	4	3	2	5			5	7				12																
3	5	2																																																	
5	2	7																																																	
7	9																																																		
	10																																																		
2	1	1	4																																																
3	2	5																																																	
	5	7																																																	
		12																																																	
<div style="text-align: center;"> <table border="1" style="margin: 0 auto;"> <tr><td></td><td>1</td><td></td></tr> <tr><td>10</td><td></td><td></td></tr> <tr><td></td><td>16</td><td></td></tr> </table> </div> <p style="text-align: center;">*</p>		1		10				16		<div style="text-align: center;"> <table border="1" style="margin: 0 auto;"> <tr><td>5</td><td>6</td><td></td></tr> <tr><td></td><td></td><td></td></tr> <tr><td></td><td>20</td><td></td></tr> </table> </div> <p style="text-align: center;">**</p>	5	6						20		<div style="text-align: center;"> <table border="1" style="margin: 0 auto;"> <tr><td>9</td><td>1</td><td>2</td><td>2</td></tr> <tr><td>10</td><td>3</td><td>4</td><td></td></tr> <tr><td></td><td>13</td><td>7</td><td></td></tr> <tr><td></td><td></td><td>20</td><td></td></tr> </table> </div> <p style="text-align: center;">***</p> <p style="text-align: right;">4</p>	9	1	2	2	10	3	4			13	7				20																
	1																																																		
10																																																			
	16																																																		
5	6																																																		
	20																																																		
9	1	2	2																																																
10	3	4																																																	
	13	7																																																	
		20																																																	
<div style="text-align: center;"> <table border="1" style="margin: 0 auto;"> <tr><td>1</td><td style="background-color: #cccccc;"></td><td>4</td></tr> <tr><td></td><td style="background-color: #cccccc;"></td><td></td></tr> <tr><td></td><td></td><td></td></tr> </table> </div> <div style="text-align: center; margin-top: 10px;"> <table border="1" style="margin: 0 auto;"> <tr><td style="background-color: #cccccc;"></td><td>+</td><td style="background-color: #cccccc;"></td><td>=</td><td>3</td></tr> </table> </div> <p style="text-align: center;">*</p>	1		4								+		=	3	<div style="text-align: center;"> <table border="1" style="margin: 0 auto;"> <tr><td>5</td><td style="background-color: #cccccc;">2</td><td>2</td></tr> <tr><td>7</td><td style="background-color: #cccccc;">4</td><td></td></tr> <tr><td></td><td>11</td><td></td></tr> </table> </div> <div style="text-align: center; margin-top: 10px;"> <table border="1" style="margin: 0 auto;"> <tr><td style="background-color: #cccccc;">2</td><td>+</td><td style="background-color: #cccccc;">4</td><td>=</td><td>6</td></tr> </table> </div> <p style="text-align: center;">**</p> <p style="text-align: right;">3</p>	5	2	2	7	4			11		2	+	4	=	6	<div style="text-align: center;"> <table border="1" style="margin: 0 auto;"> <tr><td style="background-color: #cccccc;">5</td><td>3</td><td style="background-color: #cccccc;">0</td><td>0</td></tr> <tr><td></td><td style="background-color: #cccccc;">2</td><td style="background-color: #cccccc;">0</td><td></td></tr> <tr><td></td><td>10</td><td></td><td></td></tr> <tr><td></td><td></td><td></td><td></td></tr> </table> </div> <div style="text-align: center; margin-top: 10px;"> <table border="1" style="margin: 0 auto;"> <tr><td style="background-color: #cccccc;">5</td><td>+</td><td style="background-color: #cccccc;">6</td><td>=</td><td>11</td></tr> </table> </div> <p style="text-align: center;">***</p> <p style="text-align: right;">3</p> <p style="text-align: right; font-style: italic;">JELI JSI SPRÁVNOU CESTOU. PÍŠ SI RŮZN ŘEŠENÍ A PŘIJEDEŠ NA TO.</p>	5	3	0	0		2	0			10							5	+	6	=	11
1		4																																																	
	+		=	3																																															
5	2	2																																																	
7	4																																																		
	11																																																		
2	+	4	=	6																																															
5	3	0	0																																																
	2	0																																																	
	10																																																		
5	+	6	=	11																																															

11b. x 12